




Name: \_\_\_\_\_

CCSS 3.OA.3 Use multiplication and division within 100 to solve ....

### Multiplication Arrays


Directions: Circle the problem shown by the array.



$4 \times 5 = 20$

$6 \times 3 = 18$


$4 \times 6 = 24$



$5 \times 7 = 50$

$7 \times 7 = 49$


$5 \times 7 = 35$



$6 \times 3 = 18$

$6 \times 5 = 30$

$4 \times 6 = 24$



$4 \times 5 = 20$

$5 \times 5 = 25$


$5 \times 5 = 20$



$8 \times 2 = 16$

$9 \times 2 = 20$

$9 \times 2 = 18$



$4 \times 7 = 28$

$8 \times 4 = 30$

$4 \times 8 = 32$