


Name _____

Date _____

TELLING TIME

Read the clock and add or subtract time!



What time is on the clock?

.....

What time will it be in 3 hours?


.....

What time was it 2 hour and 30 minutes ago?

.....

What time will it be in 3 hours and 25 minutes?

.....



What time is on the clock?

.....

What time will it be in 1 hours and 15 minutes?


.....

What time was it 25 minutes ago?

.....

What time will it be in 10 minutes?

.....



What time is on the clock?

.....

What time will it be in 2 hours and 40 minutes?


.....

What time was it 45 minutes ago?

.....

What time will it be in 1 hours and 15 minutes?

.....



What time is on the clock?

.....

What time will it be in 3 hours?

.....

What time was it 2 hours and 25 minutes ago?

.....

What time will it be in 3 hours and 10 minutes?

.....