







Name: _____

Monday

Math Practice: Recognize and draw shapes (2.G.1)

Identify and describe the 3-D Shape.

 Shape Name: _____	Number of Faces: _____ Number of Vertices: _____ Number of Edges: _____
 Shape Name: _____	Number of Faces: _____ Number of Vertices: _____ Number of Edges: _____
 Shape Name: _____	Number of Faces: _____ Number of Vertices: _____ Number of Edges: _____
 Shape Name: _____	Number of Faces: _____ Number of Vertices: _____ Number of Edges: _____
 Shape Name: _____	Number of Faces: _____ Number of Vertices: _____ Number of Edges: _____
 Shape Name: _____	Number of Faces: _____ Number of Vertices: _____ Number of Edges: _____