


Name: _____

1. Draw the Touch Coin Dots on each coin.
2. Count the dots by 5s. Then count the tally marks by 1s.
3. Write the total value of the coins.

Example:




_____ c

1




_____ c

2



_____ c

3



_____ c

4



_____ c

5



_____ c