










K.OA.A.2

Name: _____

Ten Frame Addition Match

Cut and paste the addition sentences to the matching ten frames.

 <input type="text"/>	 <input type="text"/>	 <input type="text"/>
 <input type="text"/>		 <input type="text"/>
 <input type="text"/>	 <input type="text"/>	 <input type="text"/>

$4 + 6 = 10$

$8 + 2 = 10$

$7 + 3 = 10$

$5 + 5 = 10$

$9 + 1 = 10$

$3 + 7 = 10$

$6 + 4 = 10$

$2 + 8 = 10$