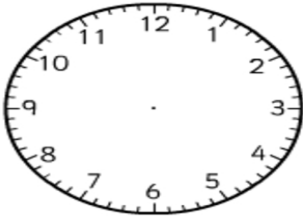


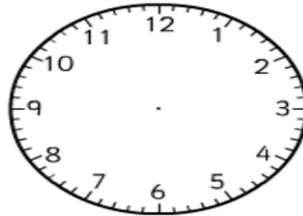
Name \_\_\_\_\_

### Time Worksheet

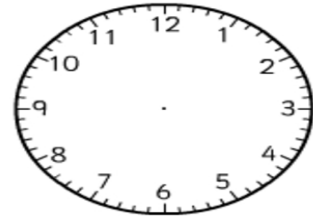
Read the time on either the digital or analogue clock and fill in the missing time.



:
---



:
---



:
---

