





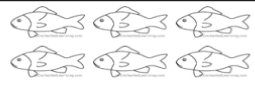

Subtract Groups of Pets


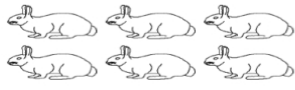
Name _____

Subtract the groups of pets and write the answers.

| | | | | |
|---|---|---|---|----------------------|
|  | - |  | = | <input type="text"/> |
| 5 | | 5 | | |

| | | | | |
|---|---|--|---|----------------------|
|  | - |  | = | <input type="text"/> |
| 6 | | 5 | | |

| | | | | |
|--|---|---|---|----------------------|
|  | - |  | = | <input type="text"/> |
| 6 | | 1 | | |

| | | | | |
|---|---|--|---|----------------------|
|  | - |  | = | <input type="text"/> |
| 6 | | 6 | | |