

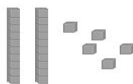





Name: \_\_\_\_\_

CCSS 2.NBT.1 Understand place value  
Primer, Prerequisite

## Place Value

**Directions:** Write how many tens and ones. Then write the number.

 ___ tens    ___ ones ___ + ___ = ___	 ___ tens    ___ ones ___ + ___ = ___
 ___ tens    ___ ones ___ + ___ = ___	 ___ tens    ___ ones ___ + ___ = ___
 ___ tens    ___ ones ___ + ___ = ___	 ___ tens    ___ ones ___ + ___ = ___