



Multiplying by 3



Write the number sentences to match the pictures.




3 sets of 3 = 9
 $3 \times 3 = 9$




4 sets of 3 =
 \times =



sets of 3 =
 \times =



sets of 3 =
 \times =



sets of 3 =
 \times =



set of 3 =
 \times =

Draw your own pictures to match these number sentences.

$5 \times 3 = 15$

$2 \times 3 = 6$

$3 \times 3 = 9$

$4 \times 3 = 12$