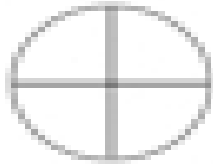
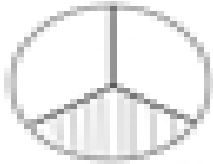
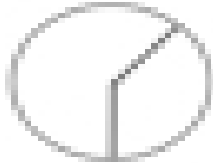











Name: \_\_\_\_\_

## Probability

Directions: Match each diagram to its correct probability.

	•	unlikely	•	
	•	equal chance	•	
	•	more likely	•	
	•	1 in 3 chance	•	
	•	50 - 50 chance	•	
	•	less likely	•	

Directions: For each probability listed above, write an event with that chance.

unlikely

\_\_\_\_\_

equal chance

\_\_\_\_\_

more likely

\_\_\_\_\_

1 in 3 chance

\_\_\_\_\_

50 - 50 chance

\_\_\_\_\_

less likely

\_\_\_\_\_