



Name \_\_\_\_\_


## Mixed Numbers


Identify and name mixed numbers and improper fractions.


Write the mixed number and the improper fraction for each picture.

	Mixed Number $1\frac{1}{3}$	Improper Fraction $\frac{4}{3}$
---	--------------------------------	------------------------------------

1. 	Mixed Number	Improper Fraction
--	--------------	-------------------

2. 	Mixed Number	Improper Fraction
---	--------------	-------------------

3. 	Mixed Number	Improper Fraction
--	--------------	-------------------

4. 	Mixed Number	Improper Fraction
--	--------------	-------------------