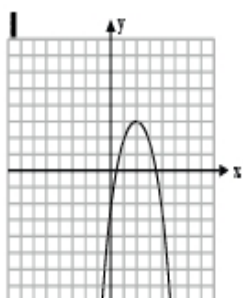
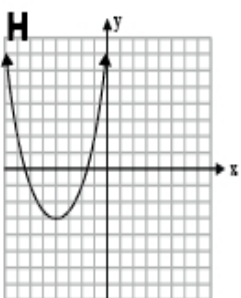
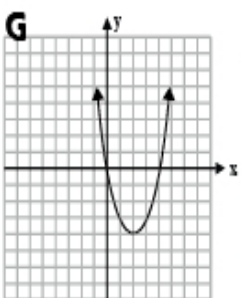
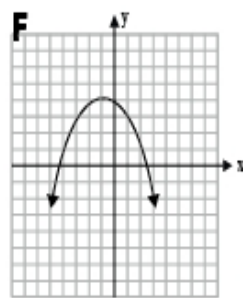
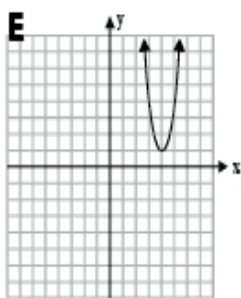
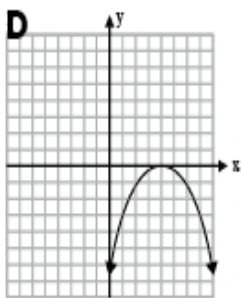
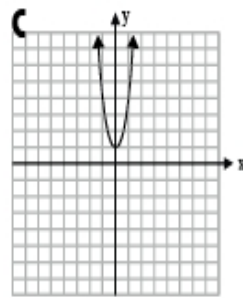
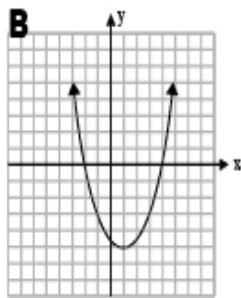
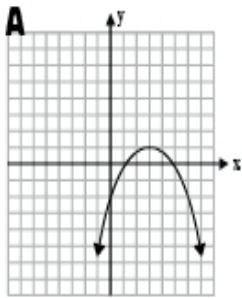


WHO AM I?

Parabolas. Identify all the possible answers for each clue.



_____ (name)

CLUES

My axis of symmetry is $x = 2$.

In my equation, $a > 0$.

I have no zeros.

My range is $y \leq 0$.

My zeros are at $x = -2$, and $x = 4$.

My maximum value is $y = 4$.

I have a minimum value.

My range is $y \geq -3$.

My domain is all real numbers.
