

Name : _____

Score : _____

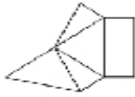
Teacher : _____

Date : _____

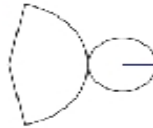
Nets Of Solids

Identify each solid given its net.

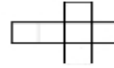
1)



2)

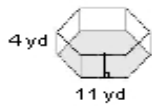


3)



Sketch the net of each solid. Label the given measurements.

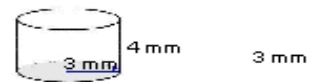
4)



5)



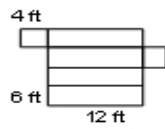
6)



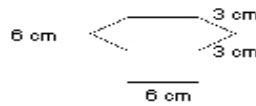
4

Sketch the solid that can be created from each net. Label the given measurements.

7)



8)



9)

