
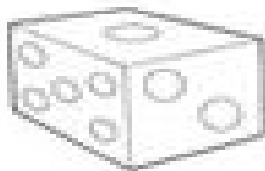



Solids

Name: _____

Write the name of the solid figure that matches the shape of each object. Use the word bank to help you.



cube • sphere • cylinder • cone
pyramid • rectangular prism