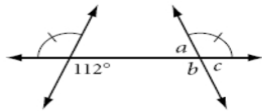


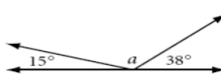
For the following problems find the measure of all the missing angles

1.



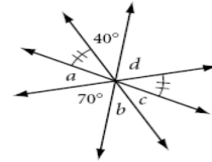
a = _____
b = _____
c = _____

2.



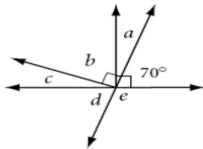
a = _____

3.



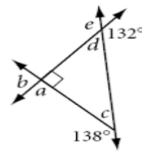
a = _____
b = _____
c = _____
d = _____

4.



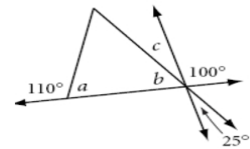
a = _____
b = _____
c = _____
d = _____
e = _____

5.



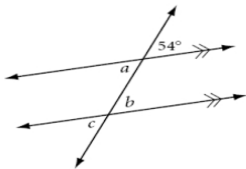
a = _____
b = _____
c = _____
d = _____
e = _____

6.



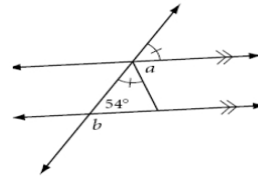
a = _____
b = _____
c = _____

7.



a = _____
b = _____
c = _____

8.



a = _____
b = _____