






Easter Egg Ratios (A)

Find the Easter egg ratio for each set of eggs.


1.  :  = :




2.  :  = :



3.  :  = :



4.  :  = :



Bonus: Simplify each ratio if necessary.
Happy Easter from Math-Drills.Com!