

Name : _____

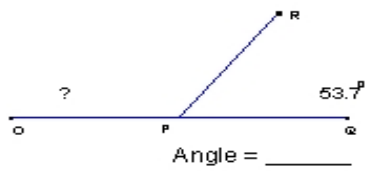
Score : _____

Teacher : _____

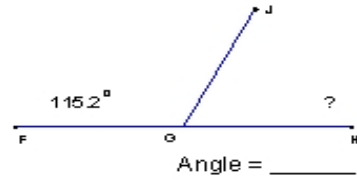
Date : _____

Find the missing angle measurement in each set of supplementary angles.

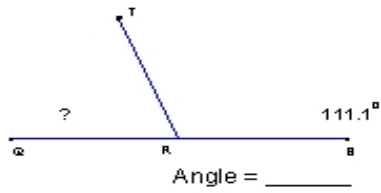
1)



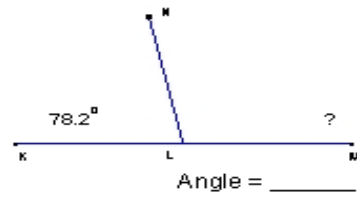
2)



3)



4)



5)



6)



7)



8)

