

1. What does "quadrilateral" mean? _____

2. Name four properties of a square

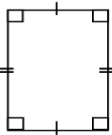
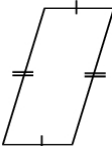
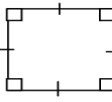
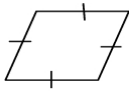
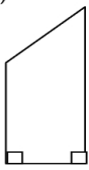
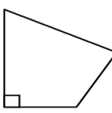
3. Name four properties of a rectangle

4. Name two properties of a rhombus

5. Name two properties of a parallelogram

6. Name one property of a trapezoid

7. List all of the quadrilateral names that can correctly be used to describe these figures.

<p>a)</p>  <p>_____</p> <p>_____</p> <p>_____</p> <p>_____</p>	<p>b)</p>  <p>_____</p> <p>_____</p> <p>_____</p> <p>_____</p>	<p>c)</p>  <p>_____</p> <p>_____</p> <p>_____</p> <p>_____</p>
<p>d)</p>  <p>_____</p> <p>_____</p> <p>_____</p> <p>_____</p>	<p>e)</p>  <p>_____</p> <p>_____</p> <p>_____</p> <p>_____</p>	<p>f)</p>  <p>_____</p> <p>_____</p> <p>_____</p> <p>_____</p>