



# What time is it?


Draw the hands and write the time




03:20




12:50




10:55




12:15




11:35




11:30



10:15



09:45



03:35

1. It is twenty past three.

6. \_\_\_\_\_

2. \_\_\_\_\_

7. \_\_\_\_\_

3. \_\_\_\_\_

8. \_\_\_\_\_

4. \_\_\_\_\_

9. \_\_\_\_\_

5. \_\_\_\_\_