

Name \_\_\_\_\_

## Plate Tectonics

Identify the three types of plate boundaries.

Draw a line to match the name of the boundary to the descriptions.

new crust is generated as  
the plates pull away from  
each other

convergent


crust is destroyed as one  
plate goes underneath the  
other

transform


crust is neither made or  
destroyed as two plate  
pass by each other  
horizontally

divergent


Write the name of the boundary shown in the diagram.



\_\_\_\_\_



\_\_\_\_\_



\_\_\_\_\_