






Name _____

Balloon Pop

Find information in a pictograph.

Use the pictograph to answer the questions.

Students	How many balloons?
Jane	
Roberto	
Dan	
Greg	
Sarah	

Jane, Roberto, Dan, Greg, and Sarah all played balloon pop at the school carnival. This pictograph shows how many balloons each student was able to pop.

Each  equals one balloon.

1. Which two students popped the same amount of balloons? _____
2. Which student popped the most balloons? _____
3. Which student popped six balloons? _____
4. How many balloons did Jane pop? _____
5. How many more balloons did Roberto pop than Dan? _____