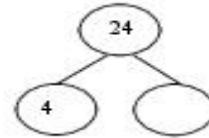
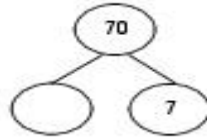
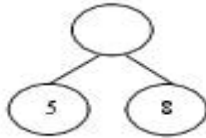
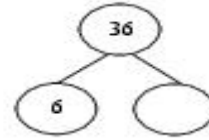
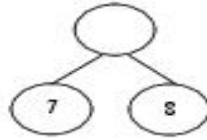
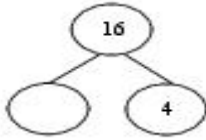


Name: _____

3rd Grade
Wednesday

Math Practice: Fluently Multiply and Divide within 100 (3.OA.7)

Complete the number bonds.



Find each product by making an array.

$$\begin{array}{r} 3 \\ \times 9 \\ \hline \end{array}$$

$$\begin{array}{r} 8 \\ \times 4 \\ \hline \end{array}$$

$$\begin{array}{r} 5 \\ \times 5 \\ \hline \end{array}$$

Complete the fact family table.

| | | | | |
|-----------------|-----------------|-----------------|-----------------|-----------------|
| 9, 45, 5 | ___ × ___ = ___ | ___ × ___ = ___ | ___ + ___ = ___ | ___ + ___ = ___ |
| 16, 2, 8 | ___ × ___ = ___ | ___ × ___ = ___ | ___ + ___ = ___ | ___ + ___ = ___ |
| 7, 4, 28 | ___ × ___ = ___ | ___ × ___ = ___ | ___ + ___ = ___ | ___ + ___ = ___ |

Solve.

$$\begin{array}{r} 9 \\ \times 2 \\ \hline \end{array}$$

$$\begin{array}{r} 8 \\ \times 4 \\ \hline \end{array}$$

$$\begin{array}{r} 3 \\ \times 7 \\ \hline \end{array}$$

$$\begin{array}{r} 2 \\ \times 8 \\ \hline \end{array}$$

$$\begin{array}{r} 6 \\ \times 8 \\ \hline \end{array}$$

$$\begin{array}{r} 3 \\ \times 9 \\ \hline \end{array}$$

$$\begin{array}{r} 6 \\ \times 3 \\ \hline \end{array}$$

$$\begin{array}{r} 7 \\ \times 9 \\ \hline \end{array}$$

$$\begin{array}{r} 48 \\ 30 \end{array} + \begin{array}{r} 8 \\ 6 \end{array} = \underline{\quad}$$

$$\begin{array}{r} 22 \\ 24 \end{array} + \begin{array}{r} 11 \\ 12 \end{array} = \underline{\quad}$$

$$\begin{array}{r} 15 \\ 28 \end{array} + \begin{array}{r} 3 \\ 7 \end{array} = \underline{\quad}$$