

Lattice Multiplication (F)


Use lattice multiplication to find each product.




$96 \times 83 = \underline{\quad}$



$38 \times 69 = \underline{\quad}$




$47 \times 16 = \underline{\quad}$



$67 \times 53 = \underline{\quad}$



$90 \times 26 = \underline{\quad}$




$21 \times 39 = \underline{\quad}$




$83 \times 95 = \underline{\quad}$




$29 \times 17 = \underline{\quad}$




$86 \times 13 = \underline{\quad}$



$24 \times 87 = \underline{\quad}$



$28 \times 45 = \underline{\quad}$



$92 \times 75 = \underline{\quad}$




$31 \times 29 = \underline{\quad}$



$39 \times 66 = \underline{\quad}$



$58 \times 31 = \underline{\quad}$



$83 \times 56 = \underline{\quad}$