



Graphing Linear Inequalities

Sketch the graph of each linear inequality.


11. $y < -3x + 4$




12. $y < \frac{3}{2}x - 2$




13. $y > x - 2$



14. $y > 4x$



15. $y > 2x + 3$



16. $y < \frac{1}{2}x + 2$

