

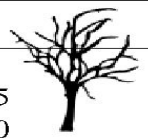




















Through the Dark Forest (D)

Find each sum to find your way through the forest.

	$\begin{array}{r} 88 \\ + 81 \\ \hline \end{array}$	$\begin{array}{r} 77 \\ + 96 \\ \hline \end{array}$		$\begin{array}{r} 75 \\ + 40 \\ \hline \end{array}$	
	$\begin{array}{r} 71 \\ + 50 \\ \hline \end{array}$		$\begin{array}{r} 68 \\ + 17 \\ \hline \end{array}$		$\begin{array}{r} 53 \\ + 98 \\ \hline \end{array}$
	$\begin{array}{r} 57 \\ + 21 \\ \hline \end{array}$		$\begin{array}{r} 78 \\ + 90 \\ \hline \end{array}$		$\begin{array}{r} 13 \\ + 26 \\ \hline \end{array}$
	$\begin{array}{r} 99 \\ + 10 \\ \hline \end{array}$		$\begin{array}{r} 37 \\ + 54 \\ \hline \end{array}$		$\begin{array}{r} 26 \\ + 15 \\ \hline \end{array}$
	$\begin{array}{r} 29 \\ + 59 \\ \hline \end{array}$		$\begin{array}{r} 86 \\ + 29 \\ \hline \end{array}$		$\begin{array}{r} 21 \\ + 94 \\ \hline \end{array}$
$\begin{array}{r} 64 \\ + 34 \\ \hline \end{array}$	$\begin{array}{r} 56 \\ + 39 \\ \hline \end{array}$		$\begin{array}{r} 54 \\ + 13 \\ \hline \end{array}$		$\begin{array}{r} 31 \\ + 34 \\ \hline \end{array}$
	$\begin{array}{r} 20 \\ + 37 \\ \hline \end{array}$		$\begin{array}{r} 97 \\ + 86 \\ \hline \end{array}$		$\begin{array}{r} 61 \\ + 41 \\ \hline \end{array}$
	$\begin{array}{r} 70 \\ + 86 \\ \hline \end{array}$	