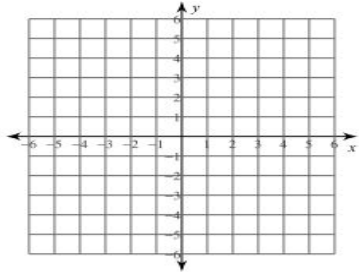
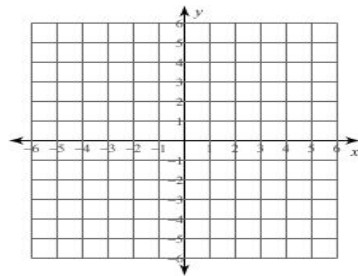


Sketch the graph of each line.

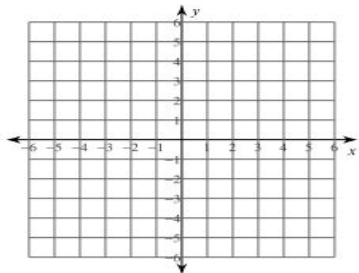
10)  $y = x + 3$



11)  $y = \frac{1}{2}x + 5$



12)  $y = -x$



13)  $y = -\frac{7}{4}x - 3$

