











Name _____

 Analog clock face with numbers 1-12. The hour hand is at 3 and the minute hand is at 12.	<input type="text"/>	 Analog clock face with numbers 1-12. The hour hand is at 3 and the minute hand is at 12.	<input type="text"/>
 Analog clock face with numbers 1-12. The hour hand is at 9 and the minute hand is at 12.	<input type="text"/>	 Analog clock face with numbers 1-12. The hour hand is at 9 and the minute hand is at 12.	<input type="text"/>
 Analog clock face with numbers 1-12. The hour hand is at 6 and the minute hand is at 12.	<input type="text"/>	 Analog clock face with numbers 1-12. The hour hand is at 3 and the minute hand is at 12.	<input type="text"/>
 Analog clock face with numbers 1-12. The hour hand is at 9 and the minute hand is at 12.	<input type="text"/>	 Analog clock face with numbers 1-12. Both the hour and minute hands are at 12.	<input type="text"/>
 Analog clock face with numbers 1-12. The hour hand is at 6 and the minute hand is at 12.	<input type="text"/>	 Analog clock face with numbers 1-12. Both the hour and minute hands are at 12.	<input type="text"/>