

Name: _____

Measure each line segment to the nearest inch and centimeter.

1.

_____ inches

_____ centimeters

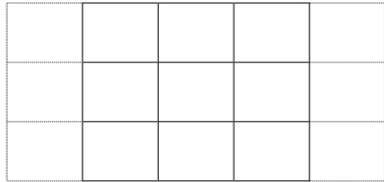
2.

_____ inches

_____ centimeters

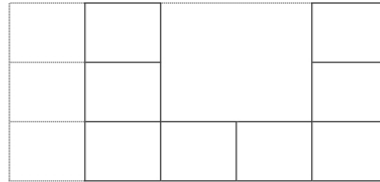
Find the area of each shape.

3.




Area = _____ sq. cm

4.



Area = _____ sq. cm

5. Draw line segment CD.



C

6. Make a ballpark estimate. Write a number model for the ballpark estimate.

$$\begin{array}{r} 47 \\ +36 \\ \hline \end{array} \quad \underline{\hspace{2cm}} + \underline{\hspace{2cm}} = \underline{\hspace{2cm}}$$