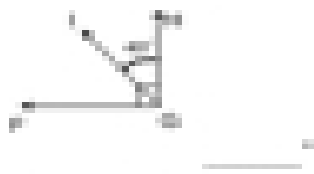
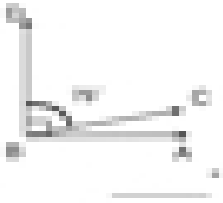
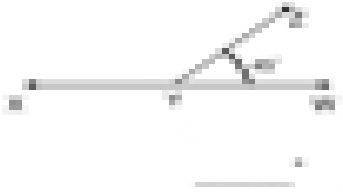



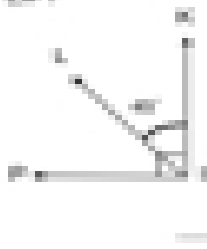

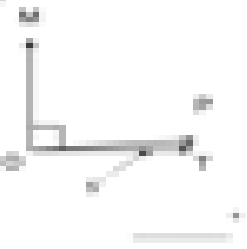


Measure the Angles

Directions: Find the measurement of each unknown complementary and supplementary angle.

<p>What is the measurement of $\angle KQP$?</p>  <p style="text-align: right;">_____ °</p>	<p>What is the measurement of $\angle ABC$?</p>  <p style="text-align: right;">_____ °</p>	<p>What is the measurement of $\angle XYZ$?</p>  <p style="text-align: right;">_____ °</p>
<p>What is the measurement of $\angle PQT$?</p>  <p style="text-align: right;">_____ °</p>	<p>What is the measurement of $\angle RST$?</p>  <p style="text-align: right;">_____ °</p>	<p>What is the measurement of $\angle NMO$?</p>  <p style="text-align: right;">_____ °</p>
<p>What is the measurement of $\angle LPT$?</p>  <p style="text-align: right;">_____ °</p>	<p>What is the measurement of $\angle PQR$?</p>  <p style="text-align: right;">_____ °</p>	<p>What is the measurement of $\angle MNP$?</p>  <p style="text-align: right;">_____ °</p>