



Name: _____ Date: _____


3.OA.6


Understanding Division

Directions: Use an unknown factor problem to find the quotient.

$42 \div 6 = ?$ $_ \times _ = _$ 

$54 \div 9 = ?$ $_ \times _ = _$ 

$72 \div 9 = ?$ $_ \times _ = _$ 

$35 \div 5 = ?$ $_ \times _ = _$ 

$64 \div 8 = ?$ $_ \times _ = _$ 