
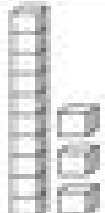



Name _____


Valentine Base Ten Blocks





Directions: Count how many base ten blocks are in each group and record your answers. Cut and paste the correct heart to match the answer.


 _____ tens _____ ones
_____ in all


 _____ tens _____ ones
_____ in all


 _____ tens _____ ones
_____ in all

 _____ tens _____ ones
_____ in all

 _____ tens _____ ones
_____ in all

 _____ tens _____ ones
_____ in all

 _____ tens _____ ones
_____ in all

 _____ tens _____ ones
_____ in all

- 11
- 16
- 18
- 12
- 14
- 17
- 15
- 13