

Name: _____








Toy Shopping



Directions: Count the coins and answer the questions.

car 9¢ drum set 12¢ Kite 5¢

top 6¢ doll 7¢ bike 15¢

_____ ¢ 	Can you buy the <u>Kite</u> ?	yes no
_____ ¢ 	Can you buy the <u>car</u> ?	yes no
_____ ¢ 	Can you buy the <u>bike</u> ?	yes no
_____ ¢ 	Can you buy the <u>drum set</u> ?	yes no
_____ ¢ 	Can you buy the <u>top</u> and <u>doll</u> ?	yes no