



Name \_\_\_\_\_

To add, touch and count the touchPoints in the correct order. Write the answer. Then say the problem and answer quietly. Count the objects to check your answer.



$7$




$4$


$+$

\_\_\_\_\_

10 touchpoints: 7 objects (circle and dot) and 4 objects (dots).



$7$




$4$


$+$

\_\_\_\_\_

11 touchpoints: 7 objects (dot) and 4 objects (dots).



$5$




$4$


$+$

\_\_\_\_\_

9 touchpoints: 5 objects (dot) and 4 objects (dots).



$8$



$4$

$+$

\_\_\_\_\_

12 touchpoints: 8 objects (dot) and 4 objects (dots).