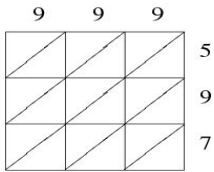
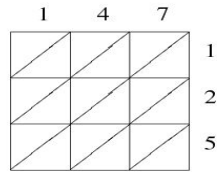


Lattice Multiplication (A)

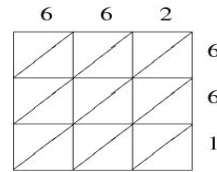
Use lattice multiplication to find each product.



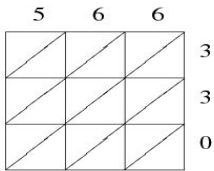
$999 \times 597 = \underline{\hspace{2cm}}$



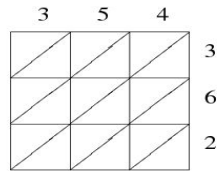
$147 \times 125 = \underline{\hspace{2cm}}$



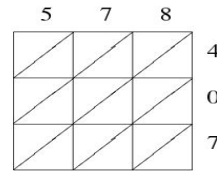
$662 \times 661 = \underline{\hspace{2cm}}$



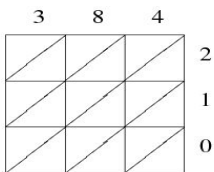
$566 \times 330 = \underline{\hspace{2cm}}$



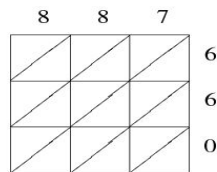
$354 \times 362 = \underline{\hspace{2cm}}$



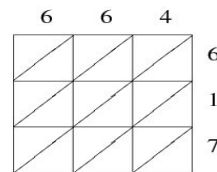
$578 \times 407 = \underline{\hspace{2cm}}$



$384 \times 210 = \underline{\hspace{2cm}}$



$887 \times 660 = \underline{\hspace{2cm}}$



$664 \times 617 = \underline{\hspace{2cm}}$