











<p>Law of Sines</p>  $\frac{\sin 30^\circ}{10} = \frac{\sin 45^\circ}{b}$ $b = 14.14$	<p>Law of Sines</p>  $\frac{\sin 30^\circ}{10} = \frac{\sin 45^\circ}{b}$ $b = 14.14$
<p>Law of Sines</p>  $\frac{\sin 30^\circ}{10} = \frac{\sin 45^\circ}{b}$ $b = 14.14$	<p>Law of Sines</p>  $\frac{\sin 30^\circ}{10} = \frac{\sin 45^\circ}{b}$ $b = 14.14$
<p>Law of Sines</p>  $\frac{\sin 30^\circ}{10} = \frac{\sin 45^\circ}{b}$ $b = 14.14$	<p>Law of Sines</p>  $\frac{\sin 30^\circ}{10} = \frac{\sin 45^\circ}{b}$ $b = 14.14$
<p>Law of Sines</p>  $\frac{\sin 30^\circ}{10} = \frac{\sin 45^\circ}{b}$ $b = 14.14$	<p>Law of Sines</p>  $\frac{\sin 30^\circ}{10} = \frac{\sin 45^\circ}{b}$ $b = 14.14$
<p>Law of Sines</p>  $\frac{\sin 30^\circ}{10} = \frac{\sin 45^\circ}{b}$ $b = 14.14$	<p>Law of Sines</p>  $\frac{\sin 30^\circ}{10} = \frac{\sin 45^\circ}{b}$ $b = 14.14$