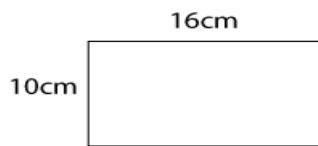




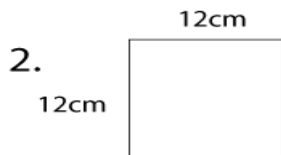
## Geometry Worksheet

Name \_\_\_\_\_

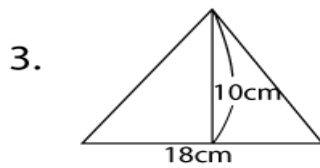
1. Find the area.



Answer: \_\_\_\_\_

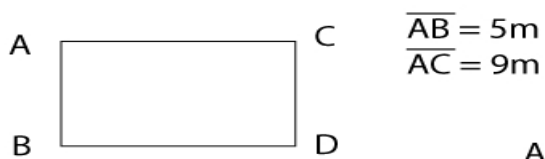


Answer: \_\_\_\_\_



Answer: \_\_\_\_\_

4. Find the perimeter.



Answer: \_\_\_\_\_