
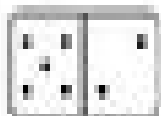


Name _____


Directions: Match up all 3 pieces to the domino addition fact, then record your answer here.




_____ + _____ = _____




_____ + _____ = _____



_____ + _____ = _____




_____ + _____ = _____




_____ + _____ = _____



_____ + _____ = _____




_____ + _____ = _____



_____ + _____ = _____




_____ + _____ = _____



_____ + _____ = _____



_____ + _____ = _____



_____ + _____ = _____