

Name : _____

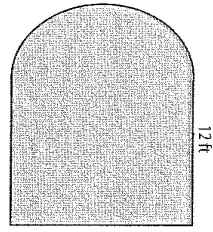
Homework

Score : _____

Area - Compound Shapes

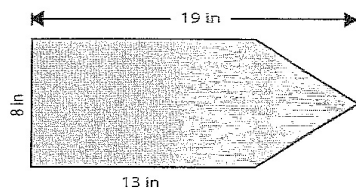
Find the area of each figure. Round the answer to 2 decimal places if necessary.

1)



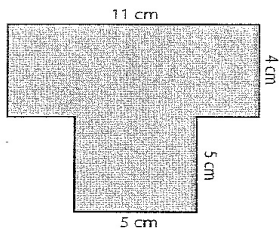
Area = _____

2)



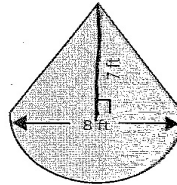
Area = _____

3)



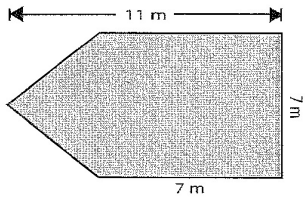
Area = _____

4)



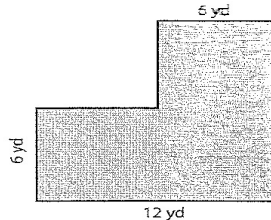
Area = _____

5)



Area = _____

6)



Area = _____