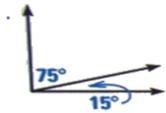


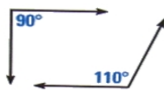
**Geometry  
1-3 Worksheet**

In 1-3 determine if the angles are complementary, supplementary or neither. Also tell whether angles are adjacent or nonadjacent.

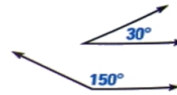
1.



2.

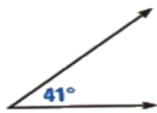


3.



In 4-5, give the measure of the angle's complement.

4.



5.



In 6-7 give the measure of the angle's supplement

6.



7.

