









**18A. Identify and classify shapes.** **Page 1**  
 (Identifying) (Classifying)

Look carefully at some 3-D shapes and fill in the spaces in the table below:

| Shape Name           | Shape Picture   | Number of Edges/Faces | Number of Vertices/Corners (including openings) | Number of Edges/Faces | Number of Edges/Faces |
|----------------------|---|-----------------------|---|-----------------------|-----------------------|
| Cube                 |    | 0                     | 0   | 0                     | 0                     |
| Cuboid               |    |                       |   |                       |                       |
| Triangular Prism     |    |                       |   |                       |                       |
| Rectangular Prism    |   |                       |   |                       |                       |
| Cylindrical Prism    |  |                       |   |                       |                       |
| Square Based Pyramid |  |                       |   |                       |                       |
| Triangular Pyramid   |  |                       |   |                       |                       |
| Oblong Cone          |  |                       |   |                       |                       |