

Name : \_\_\_\_\_

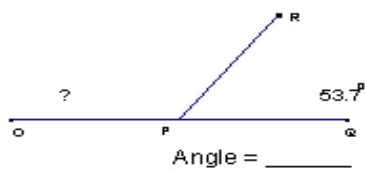
Score : \_\_\_\_\_

Teacher : \_\_\_\_\_

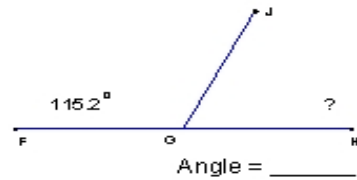
Date : \_\_\_\_\_

Find the missing angle measurement in each set of supplementary angles.

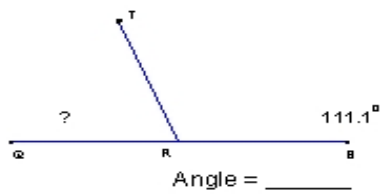
1)



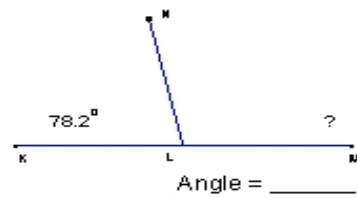
2)



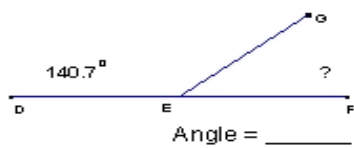
3)



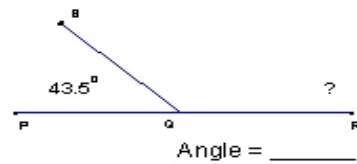
4)



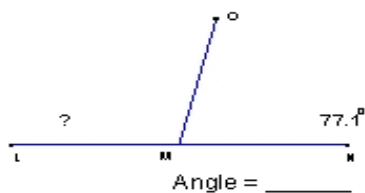
5)



6)



7)



8)

