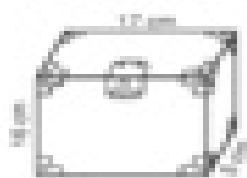



Name _____ Date _____

Leading the Loot


The Polygon Pirate is looking for the treasure chest that can hold the most loot. Find the volume of each treasure chest below. Color the one with the largest volume.




1. _____ cm^3




2. _____ cm^3




3. _____ cm^3




4. _____ cm^3




5. _____ cm^3




6. _____ cm^3



7. _____ cm^3




8. _____ cm^3



9. _____ cm^3



Volume is the number of cubic units needed to fill a container. To find the volume of a rectangular prism, multiply the length, the width, and the height ($l \times w \times h$).



10. _____ cm^3

