

Score	
	<b>12</b>
04-01-03-001-s	

Name: \_\_\_\_\_ Subject: Year 4 Numeracy  
 Date: \_\_\_\_\_ Unit: 2-D Shapes

Look at the shapes below and name them correctly.



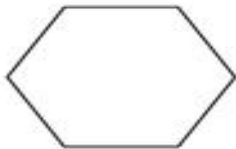
\_\_\_\_\_



\_\_\_\_\_



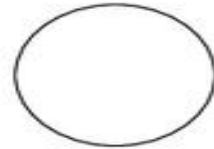
\_\_\_\_\_



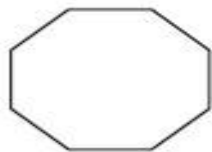
\_\_\_\_\_



\_\_\_\_\_



\_\_\_\_\_



\_\_\_\_\_




\_\_\_\_\_



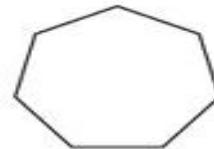
\_\_\_\_\_



\_\_\_\_\_



\_\_\_\_\_



\_\_\_\_\_