

Name : _____

Score : _____

Teacher : _____

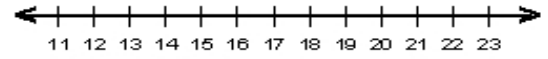
Date : _____

Solve and Graph the Inequalities

1) $8 \leq -2k - 7 + 5k$



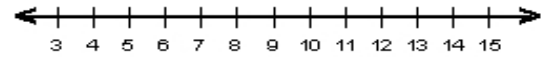
6) $6p - 11 + 2p > 117$



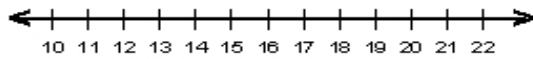
2) $-6r - 36 \geq 6(4 - 2r)$



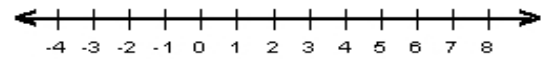
7) $-6d - 82 \leq 6(5 - 3d) - 2d$



3) $-2z + 5z \leq 57$



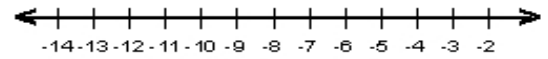
8) $-5y - 138 \leq 6(2 - 5y)$



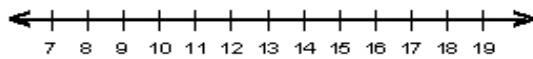
4) $40 < -4g - 4 + 2g$



9) $-2n + 6n < -44$



5) $5a - 250 > 5(6 - 4a) - 3a$



10) $3(6 - 5c) - 2c > 4c - 129$

