

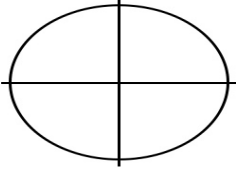
Name: _____

Date: _____

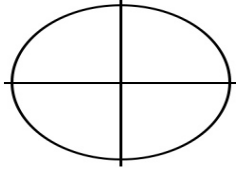
Practice Worksheet/Trig Ratios on the Unit Circle.

Find the exact value of the trig ratio without using a calculator. You must show work that supports your answers.

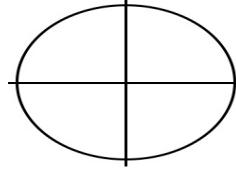
1. $\cos - 38$



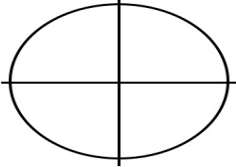
2. $\tan - 16$



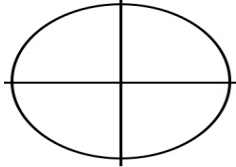
3. $\sec - 305$



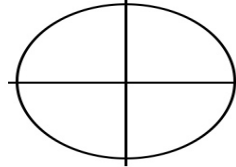
4. $\cos - 16$



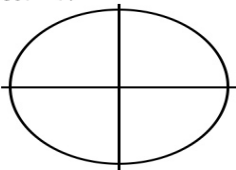
5. $\sec - 17$



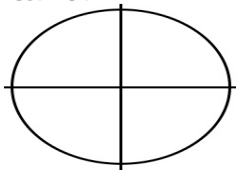
6. $\sin - 38$



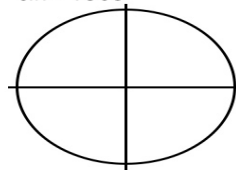
7. $\cot - 17$



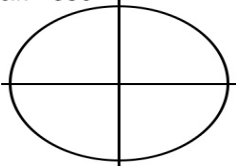
8. $\cot - 31$



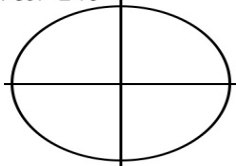
9. $\sin - 1305$



10. $\sin - 630$



11. $\cot - 240$



12. $\sin - 29$

