

Name _____

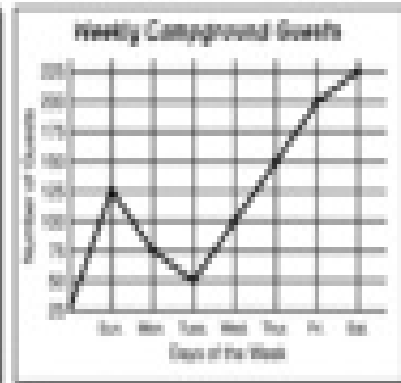


GRAPHS AND STATISTICS

Date _____

COMPARED BAR, DOUBLE BAR, AND LINE GRAPHS

Hike-a-Lot Campground

Write the name of each type of graph. Then answer the questions.



1. _____ 2. _____ 3. _____

4. Which graph shows data that changes over a period of time? _____

5. Which graph compares data for two different groups? _____


6. Which graph shows data for a whole group? _____

7. What does each type of bar on the graph "Favorite Campfire Food" represent? Explain. _____

8. Write a statement that compares two different age groups included in the graph "Ages of Hikers." _____

9. Describe the trend of the data on "Weekly Campground Guests." _____

10. Which graph do you think is the most interesting? _____



Bonus If you made a graph about the different colored tents at Hike-a-Lot Campground, what type of graph would you use? Explain.