


Name

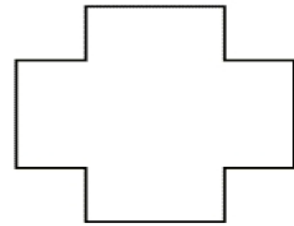
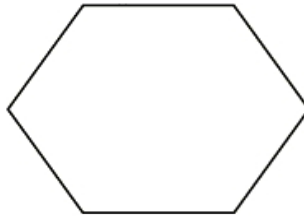
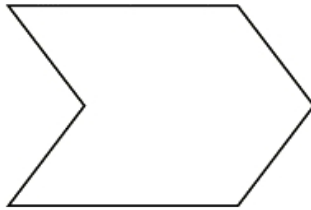
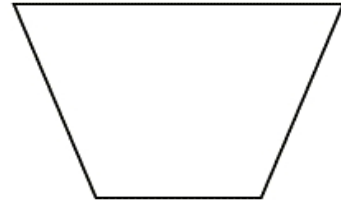
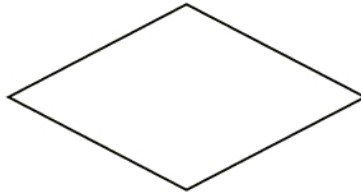
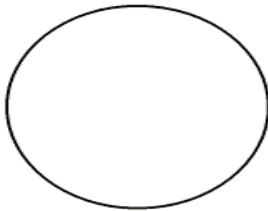

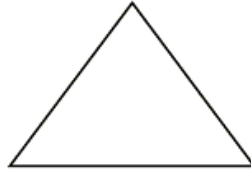

Date



## HALVES OF SHAPES SHEET 1



Shade in a half of each of the shapes below.



Remember – when you halve a shape, you split it into two **equal** parts.



©2010 Math Salamanders Ltd.

[MATH-SALAMANDERS.COM](http://MATH-SALAMANDERS.COM)

