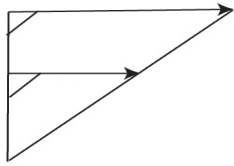


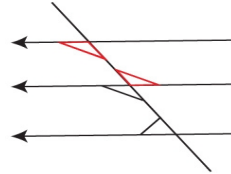
Name: \_\_\_\_\_ Date: \_\_\_\_\_

## PARALLEL LINES & ANGLES

For each of the following diagrams identify whether the angles drawn are corresponding, alternating or co-interior:

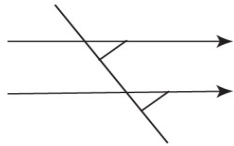


Type of angles: \_\_\_\_\_

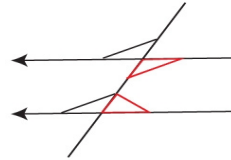


Type of angles (red): \_\_\_\_\_

Type of angles (black): \_\_\_\_\_

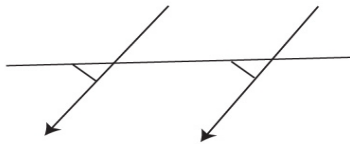


Type of angles: \_\_\_\_\_

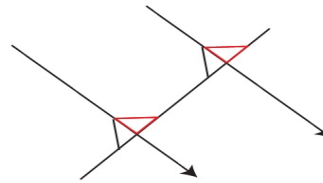


Type of angles (red): \_\_\_\_\_

Type of angles (black): \_\_\_\_\_



Type of angles: \_\_\_\_\_



Type of angles (red): \_\_\_\_\_

Type of angles (black): \_\_\_\_\_