

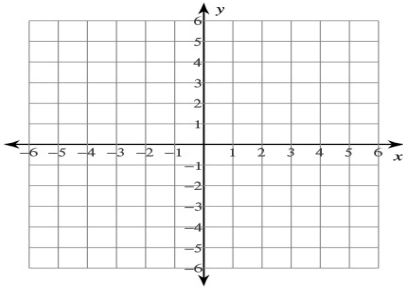
Name: _____

Date: _____

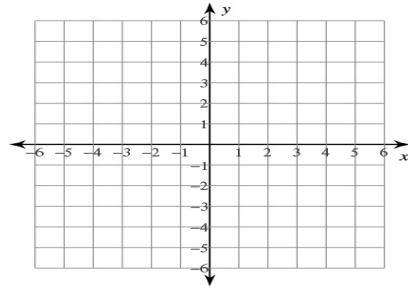
Inverse Function

Find the inverse of each function.
Then graph the function and its inverse.

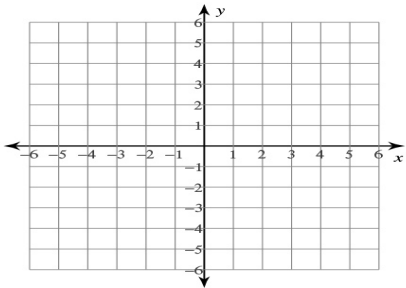
$$g(x) = \frac{-x - 5}{3}$$



$$f(x) = -2x^3 + 1$$



$$g(x) = \frac{1}{x - 1}$$



$$f(x) = -1 - \frac{1}{5}x$$

