

Writing a number sentence from a number line



What is the number sentence that matches this number line?

$$5 + 3 = 8$$

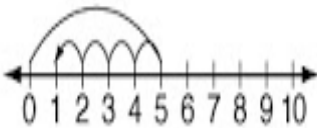
Show on the number line.

$$6 + 1 = 7$$



For each number line given, write the number sentence and answer it.

1



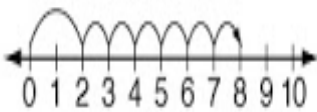
$$5 - 4 = 1$$

2



$$3 + 2 = 5$$

3



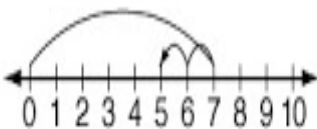
$$2 + 6 = 8$$

4



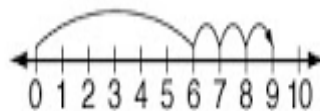
$$8 - 4 = 4$$

5




$$7 - 2 = 5$$

6



$$6 + 3 = 9$$



65

Miko drew 3 pictures and colored 2 more. How many pictures did she make in all?

$$3 + 2 = 5$$

5 pictures

$$\begin{array}{r} 5 \\ + 9 \\ \hline 14 \end{array}$$

$$\begin{array}{r} 40 \\ + 5 \\ \hline 45 \end{array}$$